

Question No : 1 of 26

Marks: 1 (Budgeted Time 1 Min)

The proposition $p \leftrightarrow q$ is called _____ ?

Answer (Please select your correct option)

- ☐ Negation
- ☐ Conjunction
- ☐ Disjunction
- ☐ Biconditional

Made By: Waqar Siddhu

Question No : 2 of 26

Marks: 1 (Budgeted Time 1 Min)

Let **p** be the statement "you study " and **q** be the statement " you pass the exams. "
Express the following proposition as an English sentence.

$$\sim p \rightarrow \sim q$$

Answer (Please select your correct option)

- ☐ If you study then you pass the exams.
- ☐ If you do not study then you pass the exams.
- ☐ If you study then you do not pass the exams.
- ☐ If you do not study then you do not pass the exams.

Made By: Waqar Siddhu

Question No : 3 of 26

Marks: 1 (Budgeted Time 1 Min)

Let **p** be the statement "You study" and **q** be the statement "You pass the exams."
Express the following proposition as an English sentence.
$$p \rightarrow q$$

Answer (Please select your correct option)

☐ If you pass the exams then you must have studied.

☐ If you study then you pass the exams.

☐ If you pass the exams then do not study.

☐ If you do not study then you do not pass the exams.

Made By: Waqar Siddhu

Question No : 4 of 26

Marks: 1 (Budgeted Time 1 Min)

What is the negation of the statement "Today is Friday" ?

Answer (Please select your correct option)

☐ Today is Saturday

☐ Today is not Friday

☐ Today is Thursday

Made By: Waqar Siddhu

Question No : 5 of 26

Marks: 1 (Budgeted Time 1 Min)

An argument is valid if the conclusion is true when all the premises are

Answer (Please select your correct option)

☐ True

☐ Not given

☐ False

Made By: Waqar Siddhu

Question No : 6 of 26

Marks: 1 (Budgeted Time 1 Min)

An argument is invalid if the conclusion is false when all the premises are

Answer (Please select your correct option)

False

☐

True

☐

Made By: Waqar Sidhu

Question No : 7 of 26

Marks: 1 (Budgeted Time 1 Min)

Let $A = \{1, 2, 3, 4\}$ and $B = \{5, 6, 7\}$, then $A \cap B = \dots\dots\dots$

Answer (Please select your correct option)

☐ {1,2,3}

☐ {5,6,7}

☐ {1,2,3,4,5,6,7}

☐ \emptyset

Made By: Waqar Siddhu

Question No : 8 of 26

Marks: 1 (Budgeted Time 1 Min)

If no element is common in two sets P and Q , then the sets are called

Answer (Please select your correct option)

☐ Exhaustive sets

☐ Dissimilar sets

☐ Disjoint sets

Made By: Waqar Siddhu

Question No : 9 of 26

Marks: 1 (Budgeted Time 1 Min)

The sets $\{1, b\}$ and $\{b, 1\}$ are equal.

Answer (Please select your correct option)

True

☐

False

☐

Made By: Waqar Siddhu

Question No : 10 of 26

Marks: 1 (Budgeted Time 1 Min)

Let $A = \{x : x \in \mathbb{N} \text{ and } x^2 + 1 = 10\}$ where \mathbb{N} is the set of natural numbers.
Which of the following is tabular form of A ?

Answer (Please select your correct option)

☐ $\{-3, 3\}$

☐ $\{3\}$

☐ $\{9\}$

☐ $\{1\}$

Made By: Waqar Siddhu

Question No : 11 of 26

Marks: 1 (Budgeted Time 1 Min)

All of the following sets are equal.
 $\{r, s, t\}, \{s, r, t\}, \{t, r, s\}, \{s, t, r\}$

Answer (Please select your correct option)

True

☐

False

☐

Made By: Waqar Siddhu

Question No : 12 of 26

Marks: 1 (Budgeted Time 1 Min)

Let R be a relation from set A to B , if R is symmetric then its inverse will be

Answer (Please select your correct option)

☐ symmetric

☐ antisymmetric

☐ transitive

Made By: Waqar Siddhu

Question No : 13 of 26

Marks: 1 (Budgeted Time 1 Min)

Which of the relation defines a function from $X = \{2,4,5\}$ to $Y = \{1,2,4,6\}$.

$R_1 = \{(2,4), (4,1)\}$

$R_2 = \{(2,4), (4,1), (4,2), (5,6)\}$

$R_3 = \{(2,4), (4,1), (5,6)\}$

Answer (Please select your correct option)

☐ R_1 and R_2

☐ R_1

☐ R_3

☐ R_2 and R_3

Made By: Waqar Siddhu

Question No : 14 of 26

Marks: 1 (Budgeted Time 1 Min)

Let R be a binary relation on a set A . R is irreflexive iff

Answer (Please select your correct option)

☐ $a \in A, (a, a) \notin R$

☐ $\forall a \in A, (a, a) \in R$

☐ $\forall a \in A, (a, a) \notin R$

Made By: Waqar Siddhu

Question No : 15 of 26

Marks: 1 (Budgeted Time 1 Min)

domain	range
-3	→ -6
-2	→ -1
-1	→ 0
0	→ 3
1	→ 15

Answer (Please select your correct option)

☐ One to one function

☐ Not a function

☐ Many to one function

☐ Onto function

Made By: Waqar Siddhu

Question No : 16 of 26

Marks: 1 (Budgeted Time 1 Min)

We calculate the sum of the series $1+2+3+\dots+100$ by using formula

Answer (Please select your correct option)

☐ $\frac{n(n+1)}{2}$

☐ $\frac{(n+1)}{2}$

☐ $\frac{n(n+1)}{6}$

Made By: Waqar Siddhu

Question No : 17 of 26

Marks: 1 (Budgeted Time 1 Min)

The nth term of an A. P (Arithmetic Progression) is.....

Answer (Please select your correct option)

☐ $a+(n-1)d$

☐ $a+(n+1)d$

☐ $(n-1)d$

Made By: Waqar Siddhu

Question No : 18 of 26

Marks: 1 (Budgeted Time 1 Min)

On the excel sheet if you enter 5 in cell A90 and 10 in cell A91 then the formula for their sum in excel is

Answer (Please select your correct option)

☐ = A90 + A91

☐

☐ = A90 × A91

☐

Made By: Waqar Siddhu

Question No : 19 of 26

Marks: 1 (Budgeted Time 1 Min)

If
Initial value = 200
Final Value = 210
Increase = 10
Then the Percentage change

Answer (Please select your correct option)

☐ 10%

☐ 5%

☐ 20%

☐ 15%

Made By: Waqar Siddhu

Question No : 20 of 26

Marks: 1 (Budgeted Time 1 Min)

If
Initial value = 12
Final Value = 15
Increase = 3
Then the Percentage change.....

Answer (Please select your correct option)

☐ 30%

☐ 15%

☐ 25%

☐ 12%

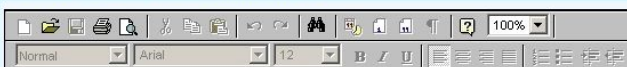
Made By: Waqar Siddhu

Question No : 21 of 26

Marks: 2 (Budgeted Time 4 Min)

A relation R on the set of Natural numbers \mathbb{N} is defined as:
For all $a, b \in \mathbb{N}$, $a R b$ iff $a \times b$ is odd.
Show that R is not reflexive.

Answer ([Please click here to Add Answer](#))



Made By: Waqar Siddhu

Question No : 22 of 26

Marks: 2 (Budgeted Time 4 Min)

Consider the following diagrams



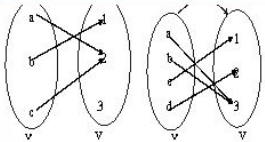
Answer ([Please click here to Add Answer](#))



Made By: Waqar Siddhu

Question No : 22 of 26

Marks: 2 (Budgeted Time 4 Min)



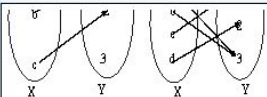
Answer ([Please click here to Add Answer](#))



Made By: Waqar Siddhu

Question No : 22 of 26

Marks: 2 (Budgeted Time 4 Min)



State whether f and g are onto functions or not?

Answer ([Please click here to Add Answer](#))



Made By: Waqar Siddhu

Question No : 23 of 26

Marks: 3 (Budgeted Time 6 Min)

Identify the true and false statements.

1. $\{2\} \subseteq \{1, 2, 3\}$
2. $\{2\} \subseteq \{\{1\}, \{2\}\}$
3. $\{2\} \in \{\{1\}, \{2\}\}$

Answer ([Please click here to Add Answer](#))



Made By: Waqar Siddhu

Question No : 24 of 26

Marks: 3 (Budgeted Time 6 Min)

Let $f: \mathbb{R} \rightarrow \mathbb{R}$ defined as $f(x) = 9x^2$. Show that the function is well defined.

Answer ([Please click here to Add Answer](#))



Made By: Waqar Siddhu

Marks: 5 (Budgeted Time 10 Min)

$$(A \cap B)^c = A^c \cup B^c$$

Made By: Waqar Siddhu

Question No : 26 of 26

Marks: 5 (Budgeted Time 10 Min)

Show that the sum of first n terms of following arithmetic series is n^2

$$1+3+5+\dots+(2n-1)$$

Answer ([Please click here to Add Answer](#))



Made By: Waqar Siddhu